
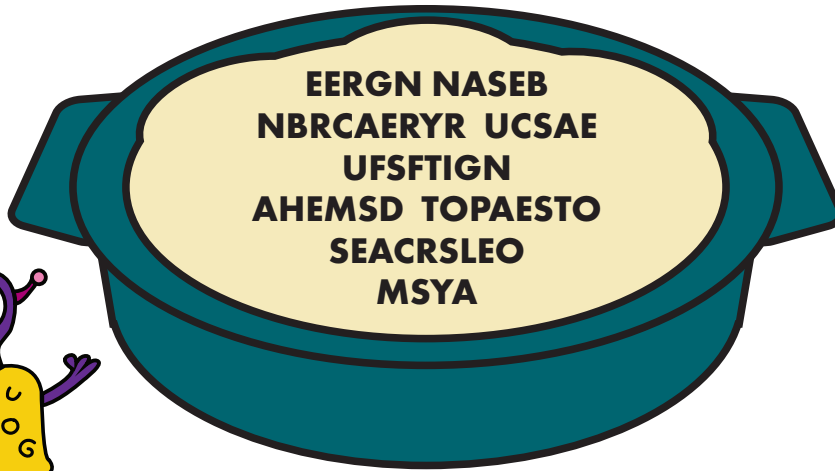


Unscramble Ana's favorite side dishes.





Ana Gram

Color in the multiples of six orange.  
Color in the square numbers green.  
Color in the prime numbers blue.

3	31	121	11	43
89	6	24	42	67
90	48	66	54	30
126	150	96	84	102
18	60	132	138	72
17	78	108	12	23

Fill in the pumpkin sections of the top of the pie with the numbers 1 through 5. In each diagonal row, the numbers should be unique. If there are 3 sections, use the numbers 1, 2, and 3. If there are 4, use 1, 2, 3, and 4. If there are 5, use 1, 2, 3, 4, and 5.



Sue Doku



Mo Zaic

What side of the turkey has the most feathers?  
The outside.